


# Making Change

Kyle and his friends went to the ballpark on Saturday. Each of them bought snacks to eat. Count up or subtract to figure out how much change each person received.

 \$1.97

Kyle paid \$2.00


$$\begin{array}{r} \$2.00 \\ - 1.97 \\ \hline 0.03 \end{array}$$

 CHIPS \$0.65


Alex paid \$1.00

 SODA \$2.20


Jonny paid \$3.00

 water \$2.25

Taylor paid \$3.00

 \$0.54

Anna paid \$1.00

 \$1.20

Kelly paid \$2.00